

TGB: Explore grouping objects in 5's to find a total

Put objects into groups of 5 and count altogether

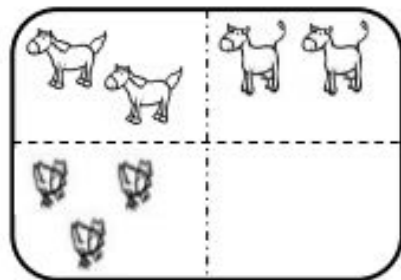
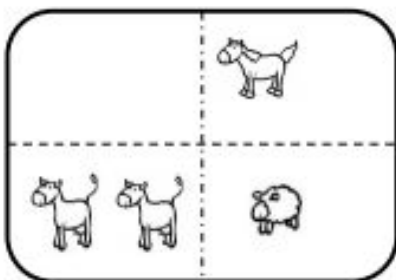
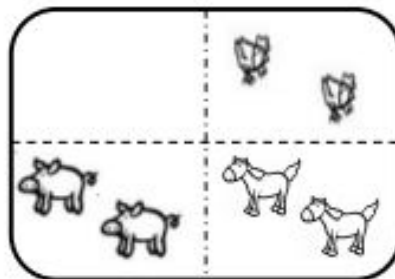
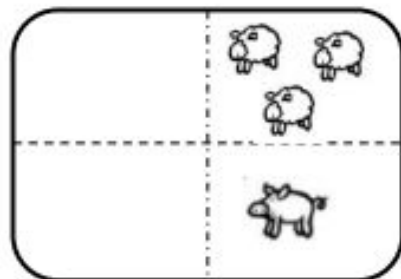
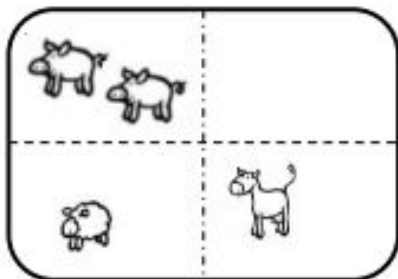
Match numbers to groups of 5's and find/say total. Count in 5's.

Draw the extra animals into the blank sections. Cross out any that are extra.

Groups of five

Help Farmer MacDonald to put his 25 animals in the correct fields.

There must be 5 animals in each field.



Use 5 cubes to make sure there are 5 animals in each field.

Can you draw your own sets of 5 to make 25?