



Year Two Parent Meeting



Meet the Team



Mrs Goodyer	Mrs Thurman
Mrs Ponsonby	Mrs Parsons
Miss Tinker	

Teacher Assessment



- We have to report Reading, Writing, Maths and Science levels for every child at the end of key stage one (Year Two)
- We gather evidence from a wide range sources and in a variety of contexts.
- It is part of our everyday teaching and learning.

For Reading, Writing and Maths

- Working towards the expected standard.
- Working at the expected standard
- Working at greater depth within the expected standard
- Pre-Key Stage (1-4)

For Science

- Working at the expected standard
- Has not met the expected standard.

For your children . . .

- Breakfast
- Complete secret missions
- Quizzes
- Fun in the hall



For you . . . The SATs Assessments



At the end of year two the children will take assessments in reading and maths.

Phonics for those who didn't pass in year one.

Access arrangements

- Breaks
- Small groups/1:1
- Readers
- Larger print papers
- Scribes



Remember

The scores are **NOT**
the be all and end all.

They are one piece
of a much bigger jigsaw.



Reading

The Reading Test consists of two separate papers:

- **Paper 1** – consists of a combined reading prompt and answer booklet. The paper includes a list of useful words and some practice questions for teachers to use to introduce the contexts and question types to pupils. The test takes approximately 30 minutes to complete, but is not strictly timed. This test is worth 20 marks.
- **Paper 2** – consists of an answer booklet and a separate reading booklet. There are no practice questions on this paper. Teachers can use their discretion to stop the test early if a pupil is struggling. The test takes approximately 40 minutes to complete, but is not strictly timed. This test is worth 20 marks.



Let's have a look . . .



XP is a multi-academy Trust

xptrust.org

Multiple Choice



1 When Bella was learning to fly, she...

Tick **one**.

was lazy.

did not try hard.

did not give up.

found it easy.



1 mark

Ranking/Ordering



7

Number the sentences below from 1 to 4 to show the order they happened in the story.

The first one has been done for you.

William sent Bella to get help.

Fishermen came to rescue William.

The boat hit some rocks.

William went to sea on his boat.



1 mark

Matching and Labelling

Here is some more information about Africa.
Match each sentence to the correct heading in the booklet.
The first one has been done for you.

Creation stories describe how and why the world was made.

Introduction

Africa has deserts, forests and mountain areas.

Clothes

Traditional African clothes are made from local materials.

Music and Dance

Some African people play 'talking drums'.

Story Time



Short-answer questions

4 What job did Tony Ross want to do before he became a writer and illustrator?

1 mark



Find and Copy Questions



16

Look at the paragraph beginning *The greedy man began to climb the vine...*

Find and **copy one** word that means the same as *sparkle*.

○
1 mark



Open Ended Questions



6 At the end of the story, Bella was happy. Why?



1 mark

How can you help at home?



Enjoy reading together

Read - all reading is valued

Ask questions

Common Exception Words



Maths

Children will sit two tests: **Paper 1 and Paper 2:**

- **Paper 1: Arithmetic** - lasts approximately 20 minutes (but this is not strictly timed). It covers calculation methods for all operations. This test is worth 25 marks.
- **Paper 2: Reasoning** - lasts for approximately 35 minutes, which includes time for five aural questions (five minutes). Pupils will still require calculation skills and questions will be varied including multiple choice, matching, true/false, completing a chart or table or drawing a shape. Some questions will also require children to show or explain their working out. This test is worth 35 marks.



Let's have a look . . .



XP is a multi-academy Trust

xptrust.org

Maths Paper 1: Arithmetic



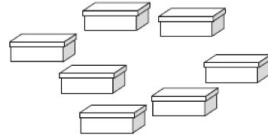
15	$3 \times 3 =$ <input type="text"/>	<input type="radio"/>
16	$12 \div 2 =$ <input type="text"/>	<input type="radio"/>

Page 11 of 20

Maths Paper 2: Reasoning



7



Sita puts 2 shoes in each of these boxes.

How many shoes are there altogether?

shoes

8 Complete the table.

words	digits
thirty-eight	38
	40
ninety-four	

Page 07 of 28


Maths Paper 2: Reasoning



27 Sita has **50** raisins.

She gives **23** to Ben.

She gives **15** to Amy.



How many raisins does Sita have left?

Show your working

raisons

2 marks

How can you help at home?

Handle money

Tell the time

Spotting 2D and 3D shapes

Weights and quantities

Times Table Rockstars

Sumdog

XP is a multi-academy Trust

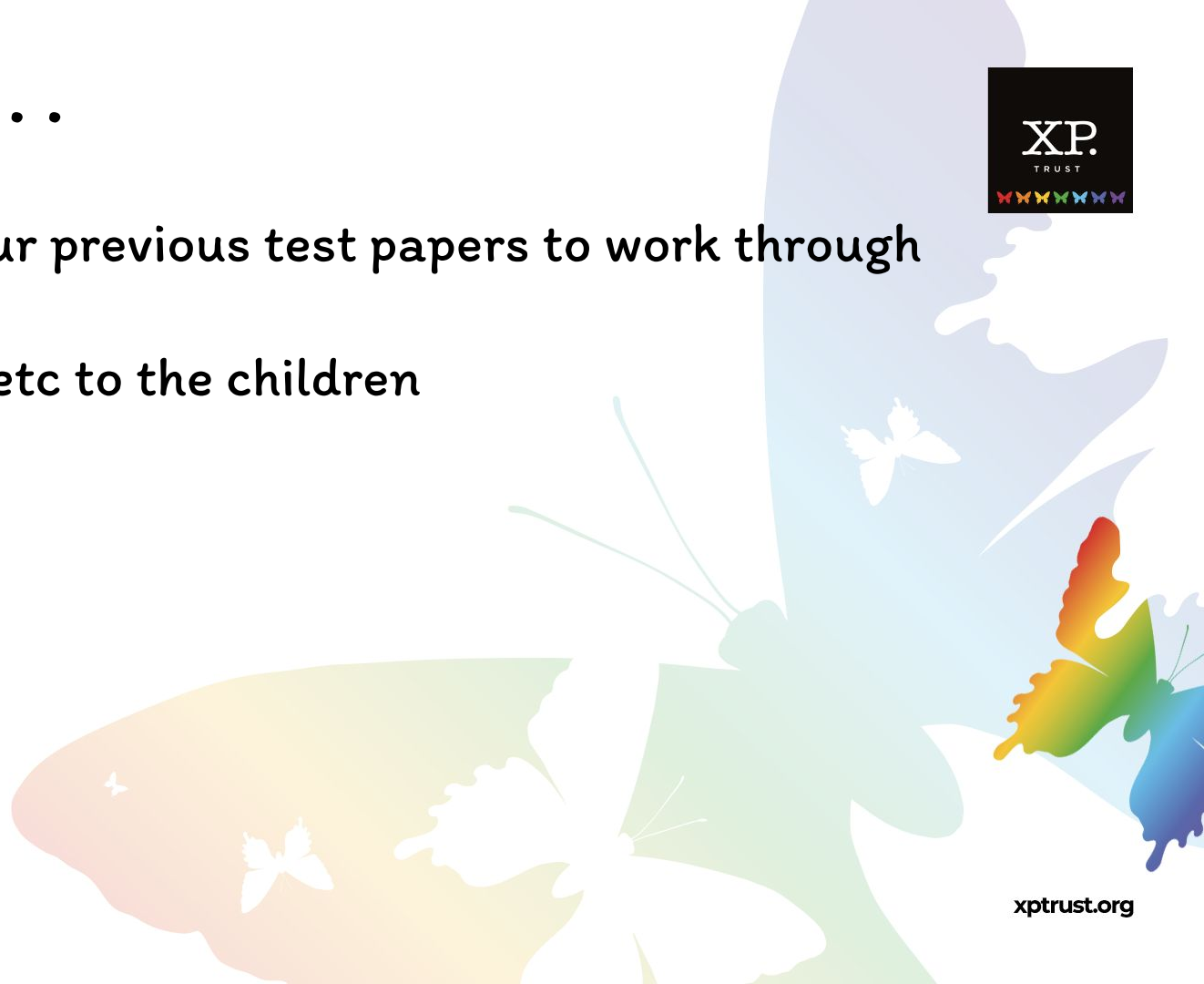


Please don't

Go home and print our previous test papers to work through

Mention tests/SATs etc to the children

Worry!



Any Questions?



XP is a multi-academy Trust

xptrust.org