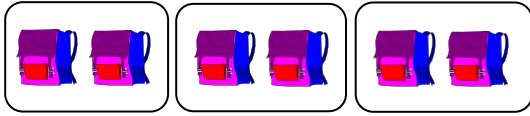


Division Facts

Example:

Write division sentence:



$$\boxed{6} \div \boxed{2} = \boxed{3}$$

1)



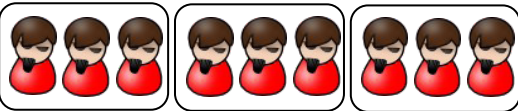
$$\boxed{\phantom{00}} \div \boxed{\phantom{00}} = \boxed{\phantom{00}}$$

2)



$$\boxed{\phantom{00}} \div \boxed{\phantom{00}} = \boxed{\phantom{00}}$$

3)



$$\boxed{\phantom{00}} \div \boxed{\phantom{00}} = \boxed{\phantom{00}}$$

4)



$$\boxed{\phantom{00}} \div \boxed{\phantom{00}} = \boxed{\phantom{00}}$$

5)



$$\boxed{\phantom{00}} \div \boxed{\phantom{00}} = \boxed{\phantom{00}}$$

6)



$$\boxed{\phantom{00}} \div \boxed{\phantom{00}} = \boxed{\phantom{00}}$$

7)



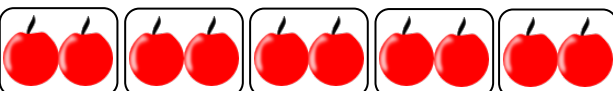
$$\boxed{\phantom{00}} \div \boxed{\phantom{00}} = \boxed{\phantom{00}}$$

8)



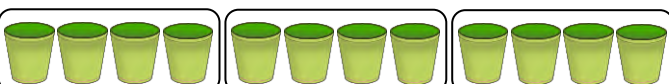
$$\boxed{\phantom{00}} \div \boxed{\phantom{00}} = \boxed{\phantom{00}}$$

9)



$$\boxed{\phantom{00}} \div \boxed{\phantom{00}} = \boxed{\phantom{00}}$$

10)

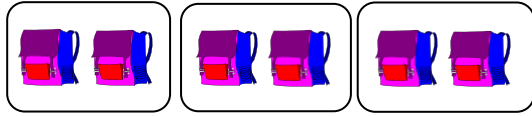


$$\boxed{\phantom{00}} \div \boxed{\phantom{00}} = \boxed{\phantom{00}}$$


**Answer key**

Example:

Write division sentence:




$$\boxed{6} \div \boxed{2} = \boxed{3}$$



$$\boxed{8} \div \boxed{4} = \boxed{2}$$



$$\boxed{15} \div \boxed{5} = \boxed{3}$$



$$\boxed{9} \div \boxed{3} = \boxed{3}$$



$$\boxed{4} \div \boxed{2} = \boxed{2}$$



$$\boxed{6} \div \boxed{3} = \boxed{2}$$




$$\boxed{8} \div \boxed{2} = \boxed{4}$$



$$\boxed{10} \div \boxed{5} = \boxed{2}$$



$$\boxed{12} \div \boxed{6} = \boxed{2}$$



$$\boxed{10} \div \boxed{2} = \boxed{5}$$



$$\boxed{12} \div \boxed{4} = \boxed{3}$$