



UK Seas and Rivers

I can name and locate the main rivers and seas of the UK.

I can identify rivers and seas using an atlas or map.



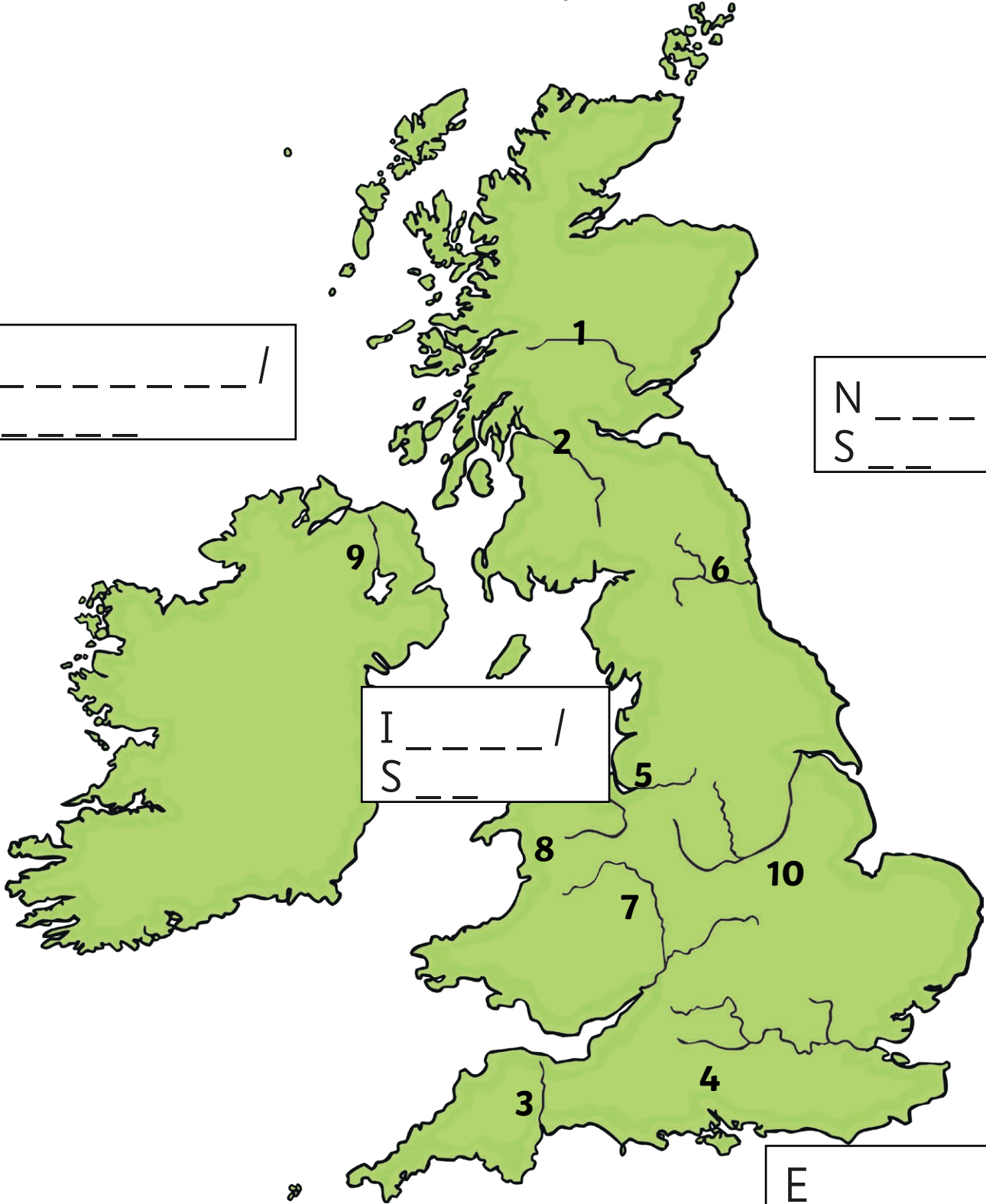
Complete the labels to show each of the seas around the UK.

A _____ /
O _____

N _____ /
S _____

I _____ /
S _____

E _____ /
C _____



Fill in the table below to show where each of these rivers are in the UK.

| Number on map | Name of river |
|---------------|---------------|
| | Thames |
| | Severn |
| | Trent |
| | Tay |
| | Bann |
| | Tyne |
| | Clyde |
| | Dee |
| | Mersey |
| | Exe |





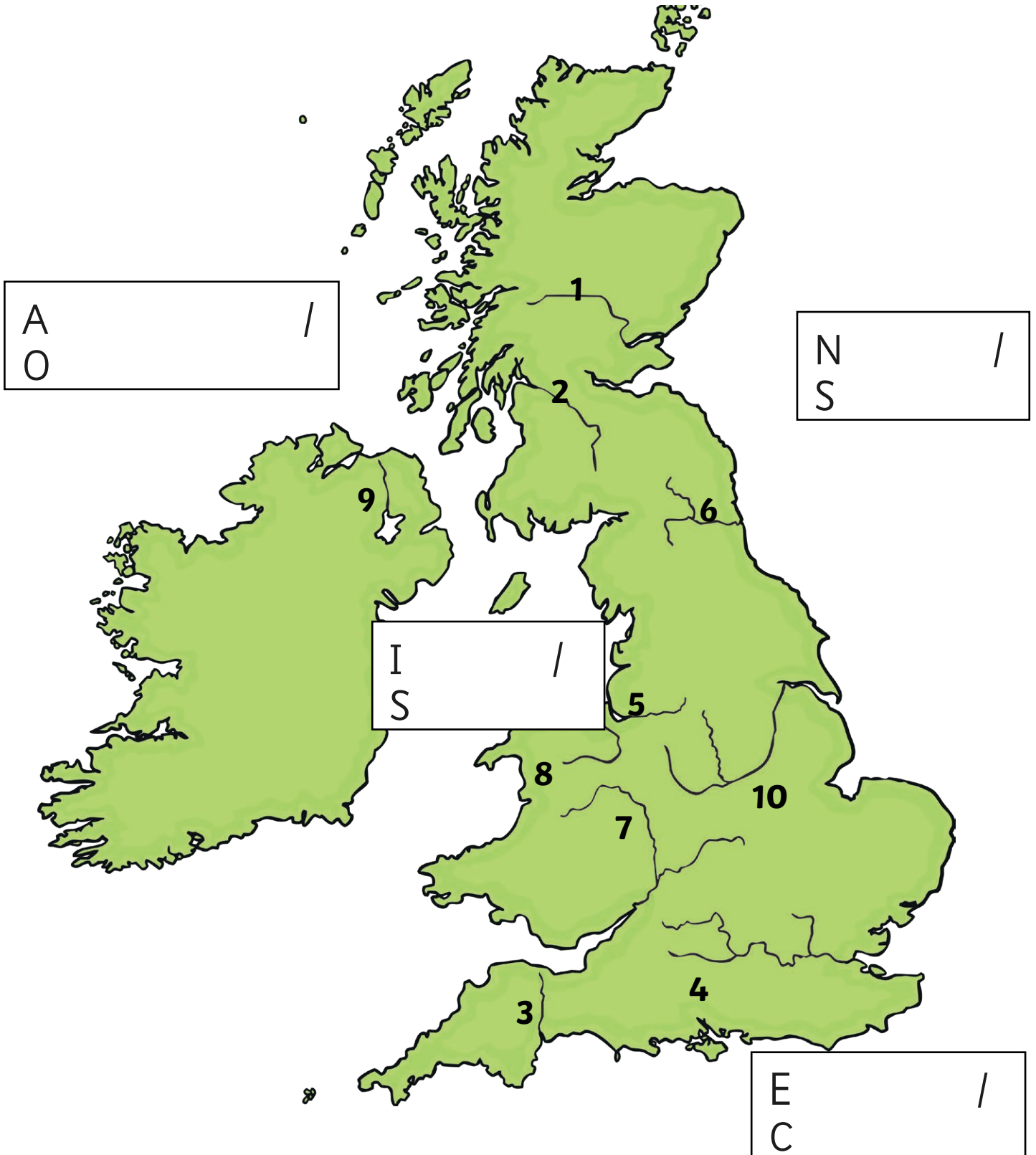
UK Seas and Rivers

I can name and locate the main rivers and seas of the UK.

I can identify rivers and seas using an atlas or map.



Complete the labels to show each of the seas around the UK.



Fill in the table below to show where each of these rivers are in the UK, and the sea that each one flows into.

| Number on map | Name of river | Sea it flows into |
|---------------|---------------|-------------------|
| | Thames | |
| | Severn | |
| | Trent | |
| | Tay | |
| | Bann | |
| | Tyne | |
| | Clyde | |
| | Dee | |
| | Mersey | |
| | Exe | |





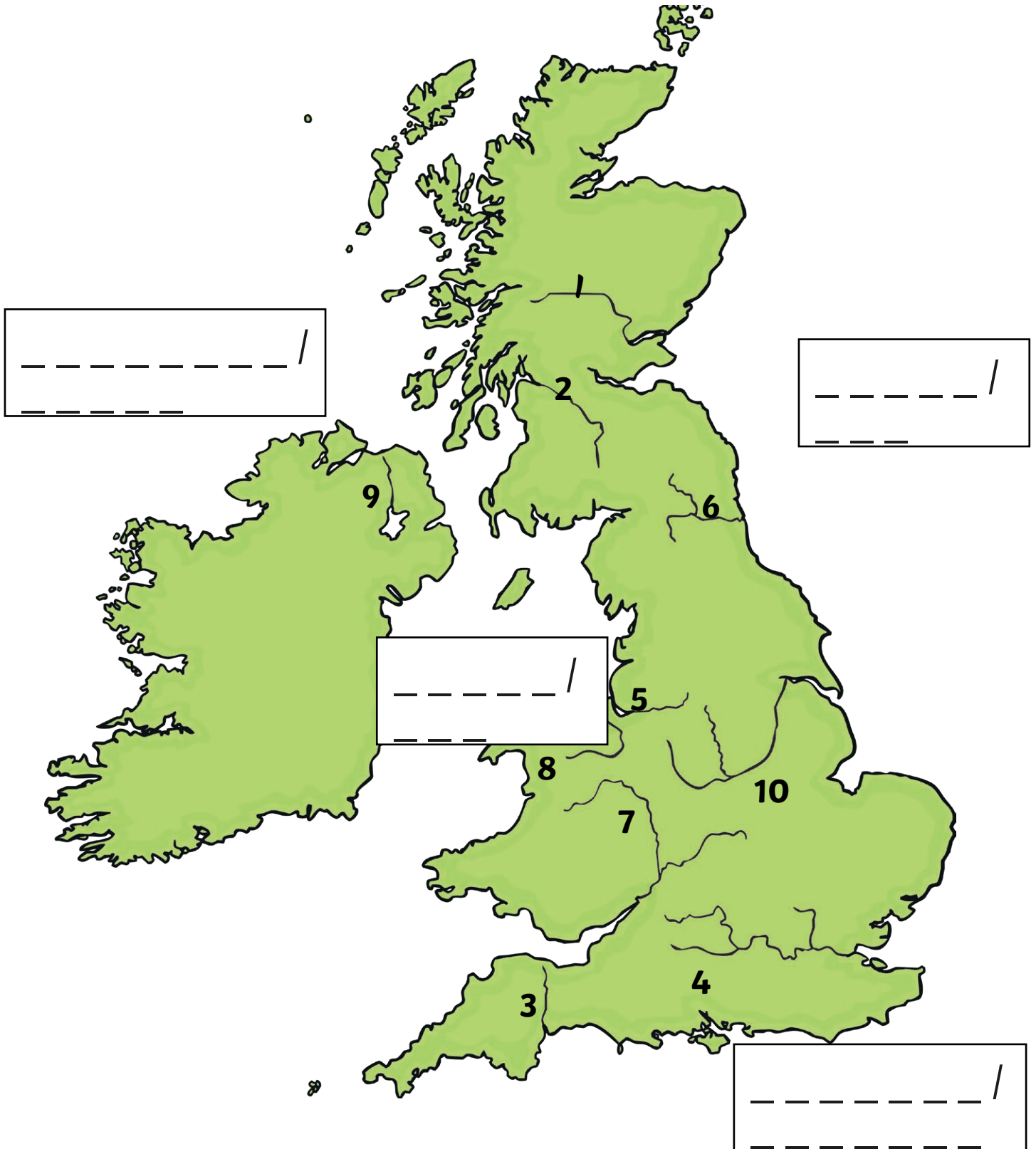
UK Seas and Rivers

I can name and locate the main rivers and seas of the UK.

I can identify rivers and seas using an atlas or map.



Complete the labels to show each of the seas around the UK.



Fill in the table below to show where each of these rivers are in the UK, and the sea that each one flows into.

| Number on map | Name of river | Sea it flows into |
|---------------|---------------|-------------------|
| 1 | | |
| 2 | | |
| 3 | | |
| 4 | | |
| 5 | | |
| 6 | | |
| 7 | | |
| 8 | | |
| 9 | | |
| 10 | | |



UK Seas and Rivers Answers



| Number on map | Name of river |
|---------------|---------------|
| 4 | Thames |
| 7 | Severn |
| 10 | Trent |
| 1 | Tay |
| 9 | Bann |
| 6 | Tyne |
| 2 | Clyde |
| 8 | Dee |
| 5 | Mersey |
| 3 | Exe |

| Number on map | Name of river | Sea it flows into |
|---------------|---------------|-------------------|
| 4 | Thames | North Sea |
| 7 | Severn | Atlantic Ocean |
| 10 | Trent | North Sea |
| 1 | Tay | North Sea |
| 9 | Bann | Atlantic Ocean |
| 6 | Tyne | North Sea |
| 2 | Clyde | Irish Sea |
| 8 | Dee | Irish Sea |
| 5 | Mersey | Irish Sea |
| 3 | Exe | English Channel |

| Number on map | Name of river | Sea it flows into |
|---------------|---------------|-------------------|
| 1 | Tay | North Sea |
| 2 | Clyde | Irish Sea |
| 3 | Exe | English Channel |
| 4 | Thames | North Sea |
| 5 | Mersey | Irish Sea |
| 6 | Tyne | North Sea |
| 7 | Severn | Atlantic Ocean |
| 8 | Dee | Irish Sea |
| 9 | Bann | Atlantic Ocean |
| 10 | Trent | North Sea |