

Here is your home learning for today. You can email any questions or photos of your work to [year3@adelaide.het.academy](mailto:year3@adelaide.het.academy).

### 9.20am - 10.20am Literacy

**L.O:** I can summarise information.


Click on the link to join the live lesson at 9:20am <https://zoom.us/j/4472066587?pwd=VzRRUXZqWUtxa2dqTHlteFFSSnlXQT09> User ID: 447 206 6587 Password: **year3**

*Task one: Match the correct word to each picture. Can you write the definition for each word too?*



Stirring Frothing Slosh Suspicious  
Screeched Dashed

*Task two: Can you fill in the information for George's Marvellous Medicine to create a summary? Think carefully about what we looked at in the lesson.*

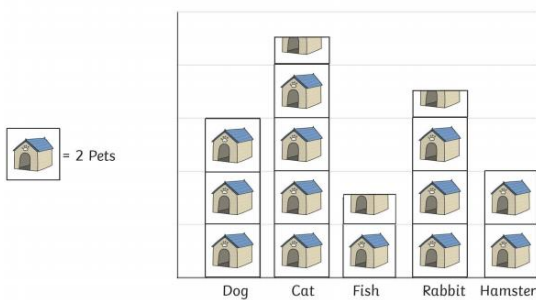


### 11.00am - 12.00pm Maths

**L.O:** I can read, interpret and create bar charts and block graphs

Click on the link to join the live lesson at 11am <https://zoom.us/j/4472066587?pwd=VzRRUXZqWUtxa2dqTHlteFFSSnlXQT09> User ID: 447 206 6587 Passcode: **year3**

Class Pets



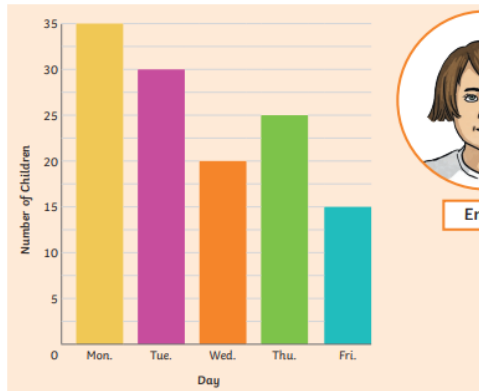
- Which is the most popular pet?
- How many pets are there in the class?
- How many more rabbits than hamsters are there?
- How many fewer dogs than cats are there?

5. Use the data below to make a bar chart:

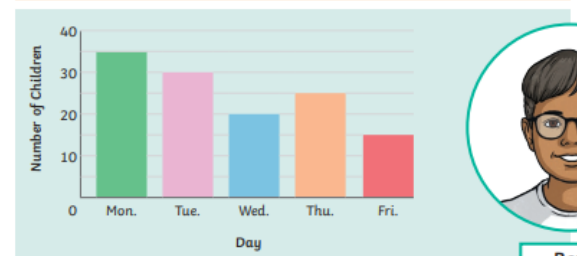
Favourite pet	Amount of children
Cat	6
Dog	8
Goldfish	1
Hamster	2

#### \*\*\*Mastery Challenge\*\*\*

Emily and Ben have both drawn bar charts to show how many children go to after school club each day.



Emily



Ben

What is the same?

What is different?

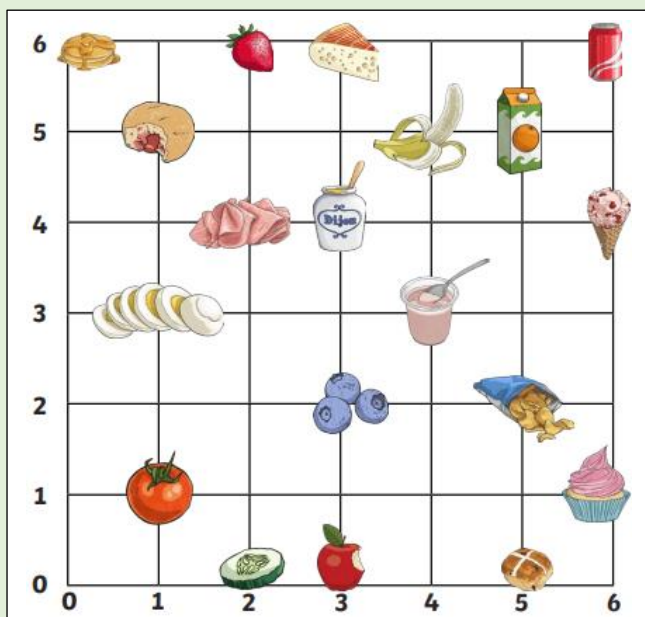
Which bar chart do you think represents the data the best? Emily's or Ben's?

### 1.20pm - 2.20pm Geography

**L.O:** I can locate four figure grid references

Click on the link to join the live lesson at 1:20pm <https://zoom.us/j/7029734187?pwd=aGpRRUQwNjhDaTB2QzhXZXlVHROZz09>

User ID: 702 973 4187 Password: **year3**



What coordinates is the following food and drink at?

- Strawberry
- Apple
- Cupcake
- Banana
- Coca Cola
- Crisps

Look carefully at the map (I have put a big version on the next page) and answer these questions:

- What is the four figure grid reference for Mellish park lodge?
- Find the grid reference **14, 24**. What is inside it?
- What is the four figure grid reference for Bridge farm bungalow?
- Can you write down a four figure grid reference that a secondary road runs through?
- Can you write down a four figure grid reference that a main road runs through?

