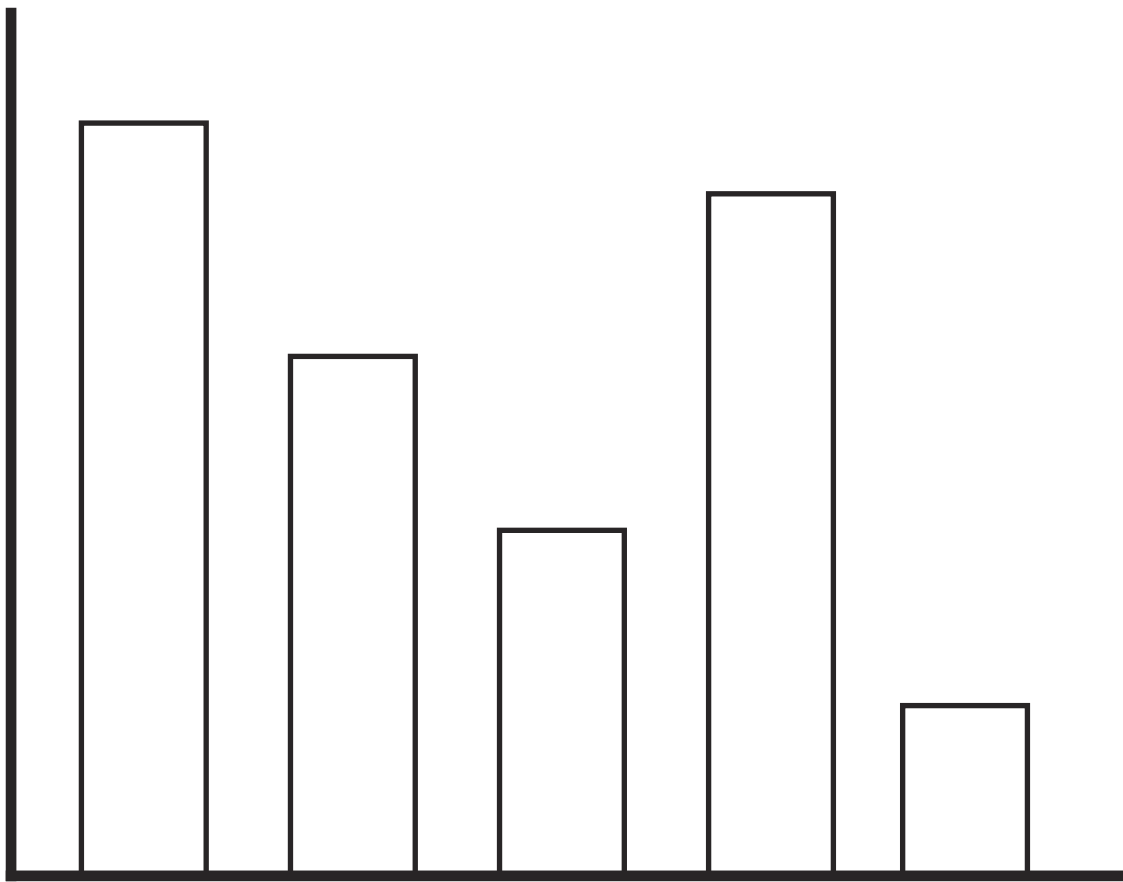


# Year 3 Statistics

## Answer Booklet

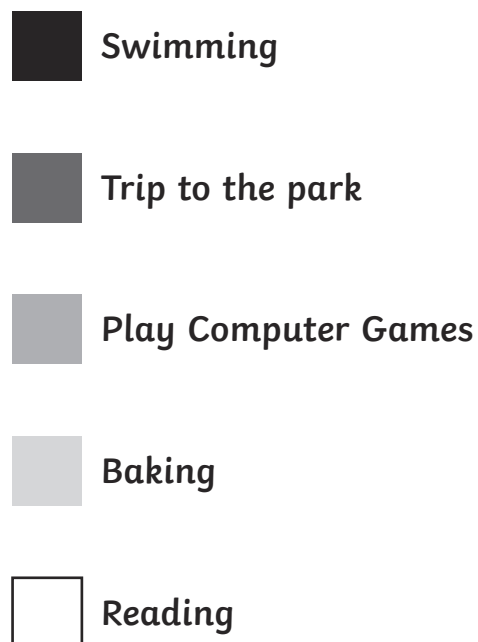
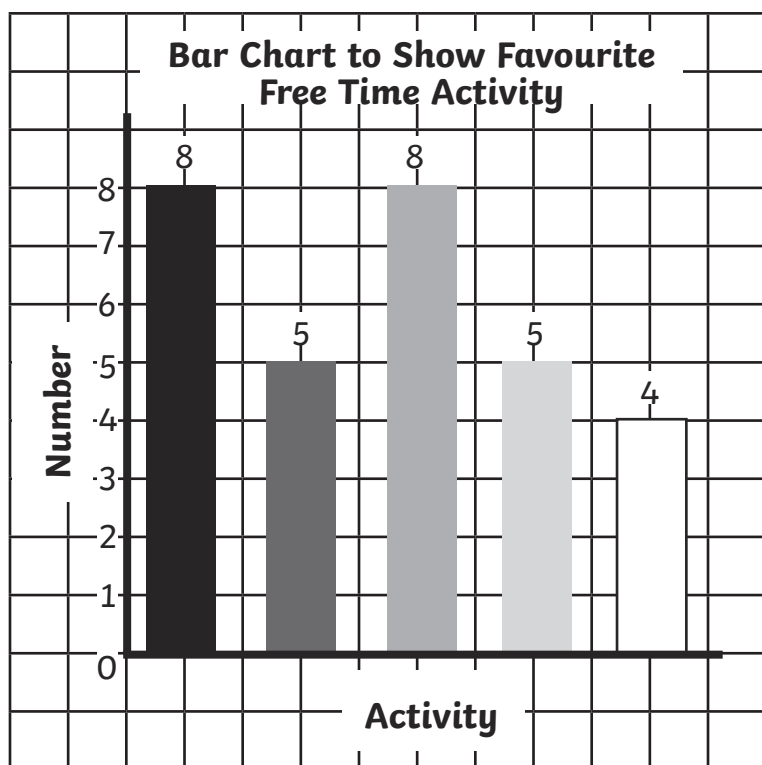


# Collecting and Presenting Data Answers

1.

Activity	Tally	Total
Swimming		8
Trip to the park		5
Play computer games		8
Baking		5
Reading		4

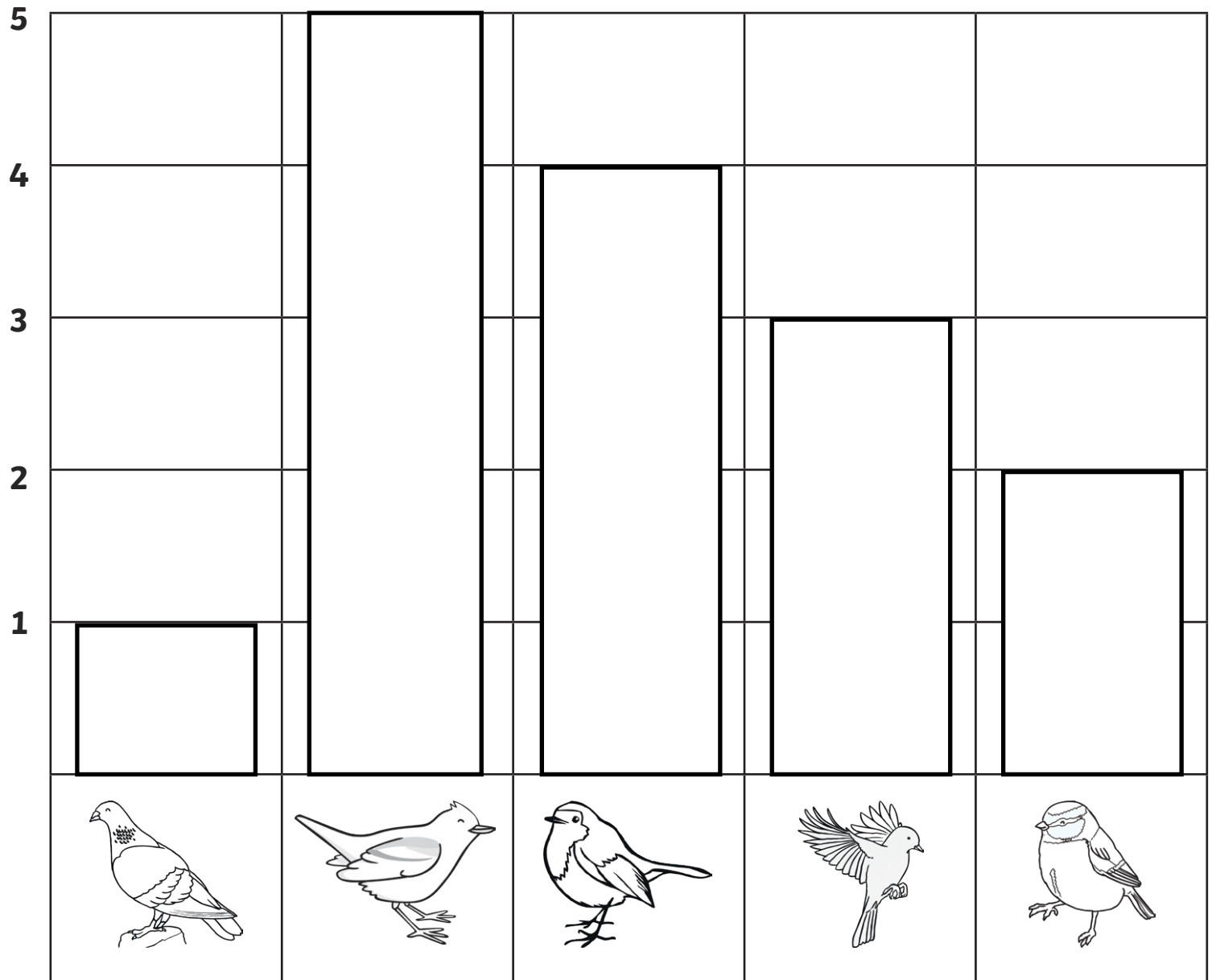
2.



# Favourite Colour Bar Graph and Tallying **Answers**

1. Red - 8 children
2. Red (8) and Orange (9), Red (8) and Green (7), Purple (1) and Blue (2)
3. 6 - Red (8) Blue (2)
4. 32
5. Orange (9), Red (8), Green (7), Yellow (5), Blue (2), Purple (1)
6. Green (7), Red (8), Orange (9)
7. Purple (1)

# Garden Bird Graph **Answers**



1. Chaffinch
2. Blue tit
3. 15
4. 9
5. 3
6. 2

# Reading Pictograms **Answers**

1. Who played computer games for the longest amount of time?

Caleb (16 hours)

---

2. What is the difference in hours between the person who played the least and the person who played the most?

11: Ali (5 hours) Caleb (16 hours)

---

3. Who played the most? Dave, Laura and Delia, or Caleb, Jenni and Ali.

Caleb, Jenni and Ali (31 hours) Dave, Laura and Delia (26 hours)

---

4. How many children spent **less than** 8 hours playing games?

2: Laura (7 hours) Ali (5 hours)

---

5. What was the total number of hours played on computer games?

57 hours

---