

# INTERPRET PICTOGRAMS



**GET READY**



1) How many does each tally represent?


a) 

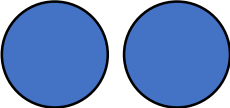
b) 

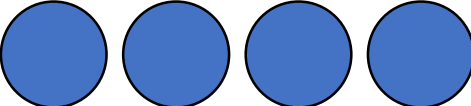
2) Draw tallies to show


a) 8


b) 16

3) If  represents 10, what is represented by...



a) 

b) 



c) 


d) 

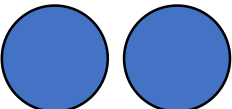
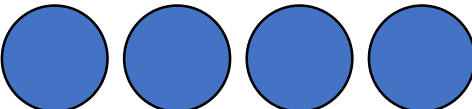
1) How many does each tally represent?

a)  7      b)  17

2) Draw tallies to show

a) 8       b) 16 






3) If  represents 10, what is represented by...


a)  20      b)  40

c)  5      d)  25

LET'S LEARN



Day	Dogs seen
Monday	
Tuesday	
Wednesday	
Thursday	
Friday	

Key  = 10 dogs

$$3 \times 10 = 30$$






$$10 + 5 = 15$$


How many dogs were seen on Wednesday?

30 dogs


How many dogs were seen on Thursday?

10<sup>1</sup>/<sub>5</sub><sub>2</sub> dogs

Day	Dogs seen
Monday	
Tuesday	
Wednesday	
Thursday	
Friday	


Key  = 10 dogs

How many more dogs were seen on Wednesday than Tuesday?






I will subtract to find the difference.

I know an easier way to compare.



# How many more dogs were seen on Wednesday Than Tuesday?

Tuesday		Key  = 10 dogs
Wednesday		




30 dogs were seen on Wednesday.

10 dogs were seen on Tuesday.

$$30 - 10 = 20$$


20 more dogs were seen on Wednesday than Tuesday.





I can see there are  
20 more dogs on  
Wednesday.



Player	Goals scored
Alex	
Jack	
Mo	
Rosie	
Whitney	


Key  = 2 goals

I scored 6.  
That's the  
most goals!



Jack scored 1  
goal.

What do you notice?








Mo scored 2  
more goals  
than Whitney.

19 goals were  
scored  
altogether.



Have a think

Game 1                      Key  = 5 points                      Game 2

Player	Points scored	Player	Points scored
Ron		Ron	
Amir		Amir	

How many points did Ron score overall? **30 points**

Who scored the most points overall? **Amir**

In which game were most points scored? **Game 1**

Have a think



**YOUR TURN**

Have a go at the questions  
on the worksheet

