

10.12.24

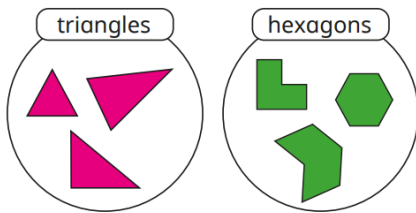
LO: To sort 2-D shapes.

Can you sort the shapes into triangles and pentagons?



Try This

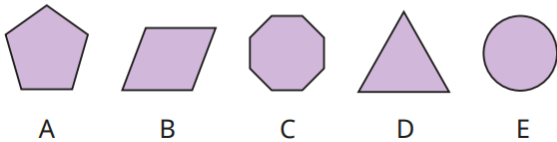
Kay sorts some shapes.



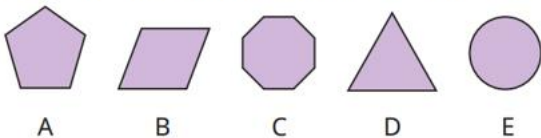
- a) Is Kay correct?
How do you know?
- b) Draw a group of three different pentagons.

Challenge

Sort the shapes in order of the number of sides.
Start with the shape that has the fewest sides.

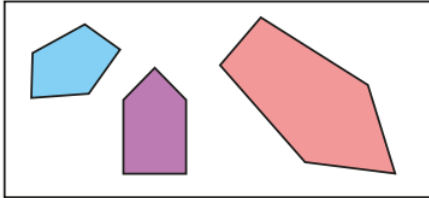
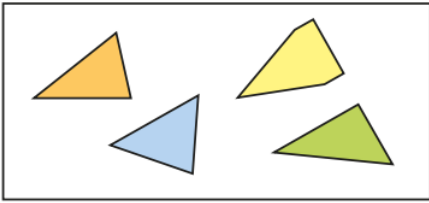


Sort the shapes in order of the number of vertices.
Start with the shape that has the fewest vertices.



Greater depth

Tiny is sorting 2D shapes:



I have sorted
the shapes by
number of sides.

Do you agree with Tiny's sorting?

Why?