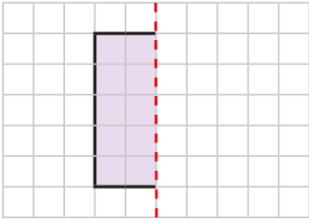


9.12.24

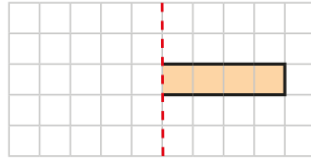
L.O. To use lines of symmetry to complete shapes.

Can you complete each shape?

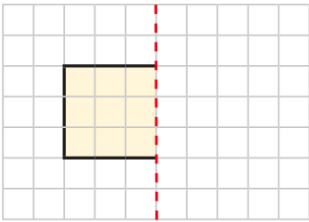
a)



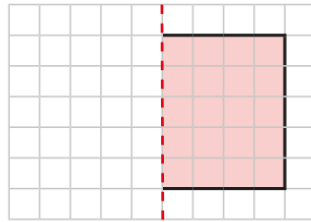
c)



b)

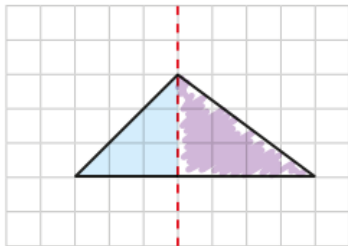


d)



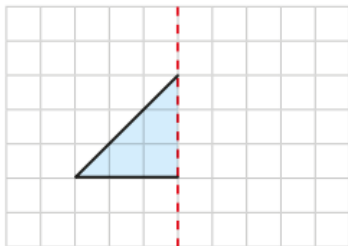
Now try this:

Kim has completed this shape.



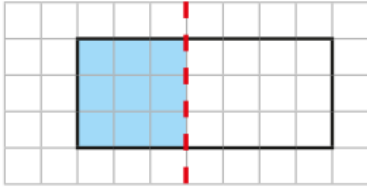
a) What has she done wrong?

b) Complete the shape correctly.



Challenge

Tiny is completing shapes:



I have completed the rectangle. The dashed line is a line of symmetry.



Do you agree with Tiny?



Greater depth

Here is half a star and its line of symmetry. Complete the star.

