

Adding Fractions

Colour in the fraction bars to show these calculations and then give the answers.

1) $\frac{2}{5} + \frac{1}{5} =$

--	--	--	--	--

2) $\frac{1}{3} + \frac{1}{3} =$

--	--	--

3) $\frac{4}{8} + \frac{3}{8} =$

--	--	--	--	--	--	--	--

4) $\frac{2}{7} + \frac{3}{7} =$

--	--	--	--	--	--	--

5) $\frac{1}{4} + \frac{3}{4} =$ or

--	--	--	--

6) $\frac{3}{6} + \frac{1}{6} =$

--	--	--	--	--	--

7) $\frac{4}{9} + \frac{4}{9} =$

--	--	--	--	--	--	--	--	--

8) $\frac{2}{10} + \frac{4}{10} + \frac{3}{10} =$

--	--	--	--	--	--	--	--	--	--

Adding Fractions

Draw fraction bars to show these calculations and then give the answers.

9) $\frac{2}{6} + \frac{3}{6} =$

10) $\frac{5}{10} + \frac{3}{10} =$

11) $\frac{1}{5} + \frac{3}{5} =$

12) $\frac{4}{7} + \frac{2}{7} =$

Adding Fractions Answers

Colour in the fraction bars to show these calculations and then give the answers. **Fractions which are equivalent to those shown should also be accepted as correct answers.**

1) $\frac{2}{5} + \frac{1}{5} = \boxed{\frac{3}{5}}$



2) $\frac{1}{3} + \frac{1}{3} = \boxed{\frac{2}{3}}$




3) $\frac{4}{8} + \frac{3}{8} = \boxed{\frac{7}{8}}$



4) $\frac{2}{7} + \frac{3}{7} = \boxed{\frac{5}{7}}$



5) $\frac{1}{4} + \frac{3}{4} = \boxed{\frac{4}{4}}$ or $\boxed{1}$




6) $\frac{3}{6} + \frac{1}{6} = \boxed{\frac{4}{6}}$



7) $\frac{4}{9} + \frac{4}{9} = \boxed{\frac{8}{9}}$



8) $\frac{2}{10} + \frac{4}{10} + \frac{3}{10} = \boxed{\frac{9}{10}}$

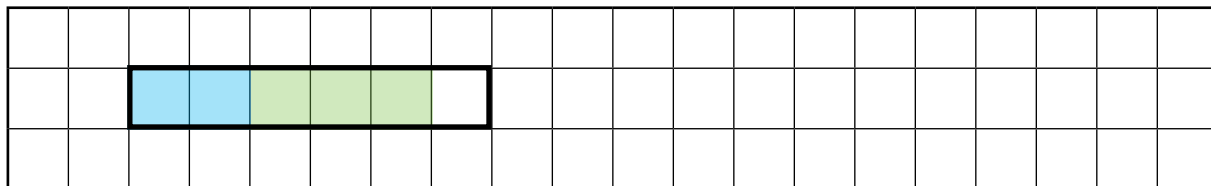


Adding Fractions **Answers**

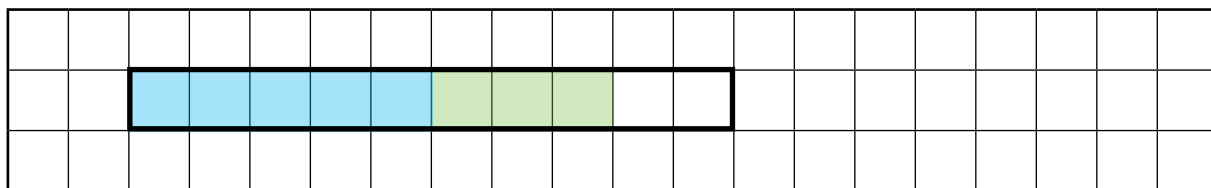
Draw fraction bars to show these calculations and then give the answers.

The fraction bars can be drawn in any size as long as the size and parts coloured in represent the correct fractions. **Fractions which are equivalent to those shown should also be accepted as correct answers.**

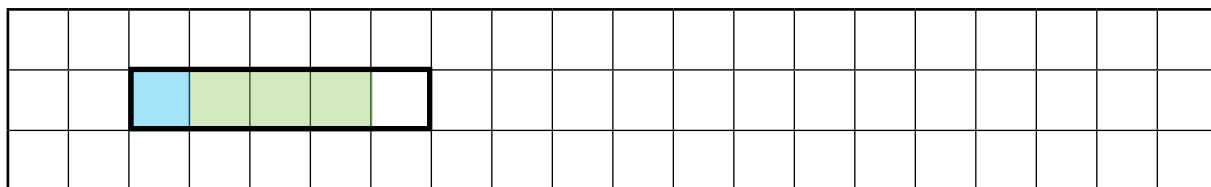
9) $\frac{2}{6} + \frac{3}{6} = \frac{5}{6}$



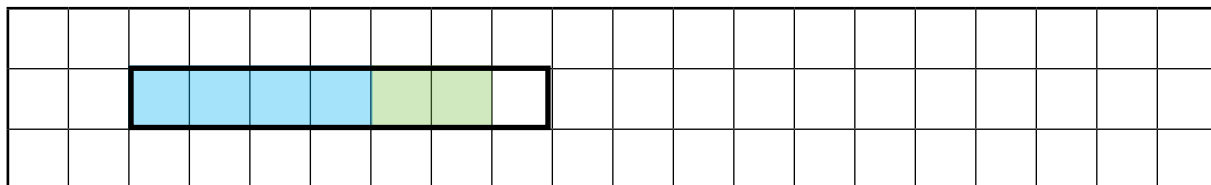
10) $\frac{5}{10} + \frac{3}{10} = \frac{8}{10}$



11) $\frac{1}{5} + \frac{3}{5} = \frac{4}{5}$





12) $\frac{4}{7} + \frac{2}{7} = \frac{6}{7}$







Adding Fractions

Colour in the fraction bars to show these calculations and then give the answers.

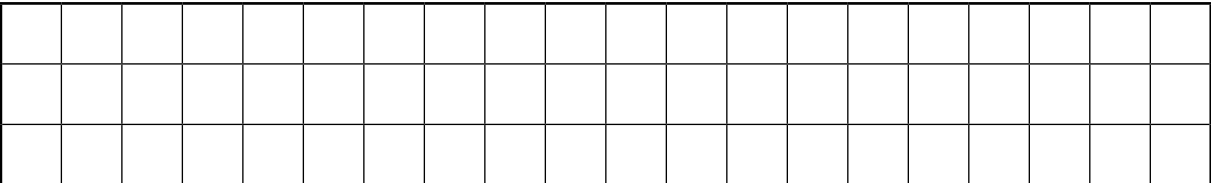
1) $\frac{2}{7} + \frac{3}{7} =$ 

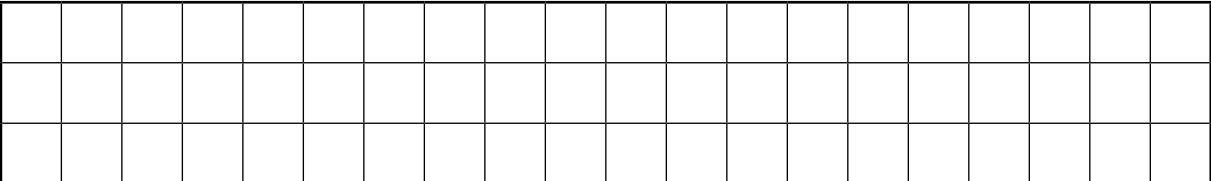
2) $\frac{2}{10} + \frac{4}{10} + \frac{3}{10} =$ 

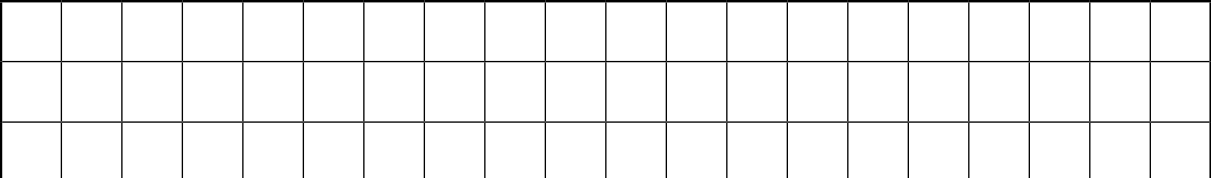
3) $\frac{5}{6} + \frac{3}{6} =$ or  

4) $\frac{6}{8} + \frac{3}{8} =$ or  

Draw fraction bars to show these calculations and then give the answers.

5) $\frac{2}{6} + \frac{3}{6} =$ 

6) $\frac{3}{5} + \frac{4}{5} =$ or 

7) $\frac{2}{4} + \frac{3}{4} =$ or 

Draw fraction bars to show these calculations and then give the answers.

8) $\frac{5}{10} + \frac{3}{10} = \square$

9) $\frac{4}{6} + \frac{5}{6} = \square$ or \square

10) $\frac{5}{9} + \frac{7}{9} = \square$ or \square

11) $\frac{5}{8} + \frac{7}{8} = \square$ or \square

12) $\frac{2}{3} + \frac{3}{3} + \frac{2}{3} = \square$ or \square


Adding Fractions Answers

Colour in the fraction bars to show these calculations and then give the answers.


1) $\frac{2}{7} + \frac{3}{7} = \frac{5}{7}$



2) $\frac{2}{10} + \frac{4}{10} + \frac{3}{10} = \frac{9}{10}$



3) $\frac{5}{6} + \frac{3}{6} = \frac{8}{6}$ or $1\frac{2}{6}$

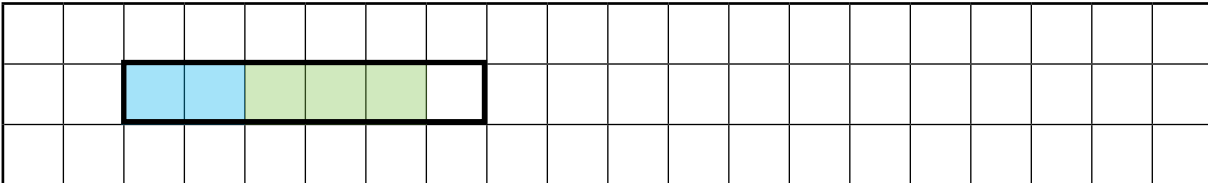


4) $\frac{6}{8} + \frac{3}{8} = \frac{9}{8}$ or $1\frac{1}{8}$

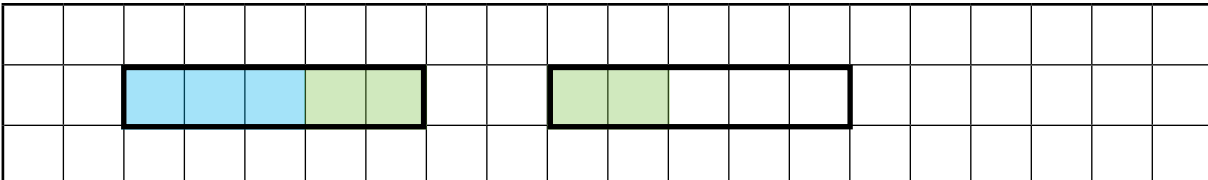


Draw fraction bars to show these calculations and then give the answers.

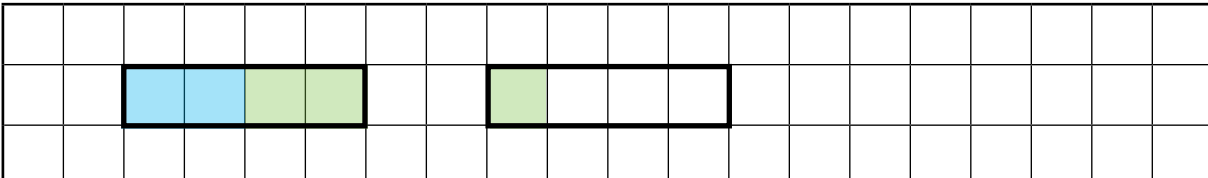
5) $\frac{2}{6} + \frac{3}{6} = \frac{5}{6}$



6) $\frac{3}{5} + \frac{4}{5} = \frac{7}{5}$ or $1\frac{2}{5}$

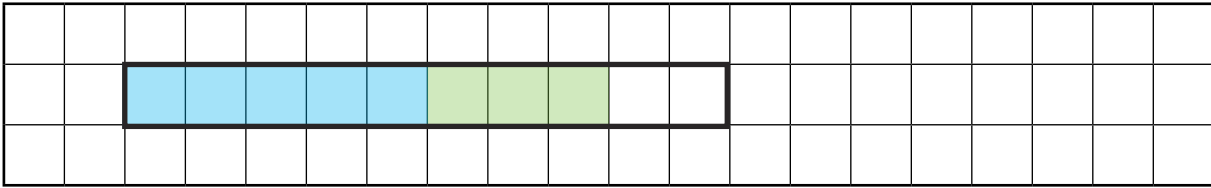


7) $\frac{2}{4} + \frac{3}{4} = \frac{5}{4}$ or $1\frac{1}{4}$

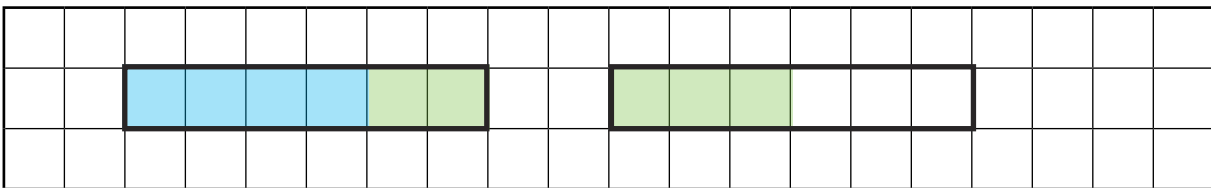


Draw fraction bars to show these calculations and then give the answers.

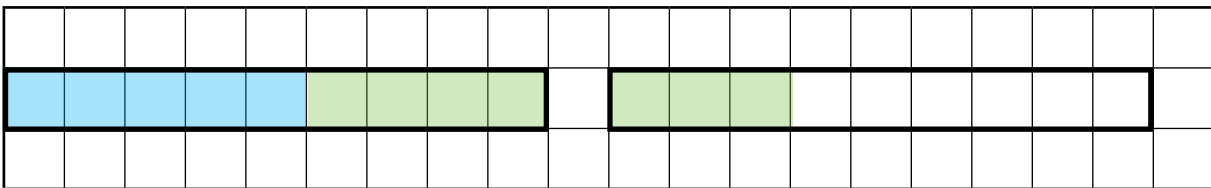
8) $\frac{5}{10} + \frac{3}{10} = \frac{8}{10}$



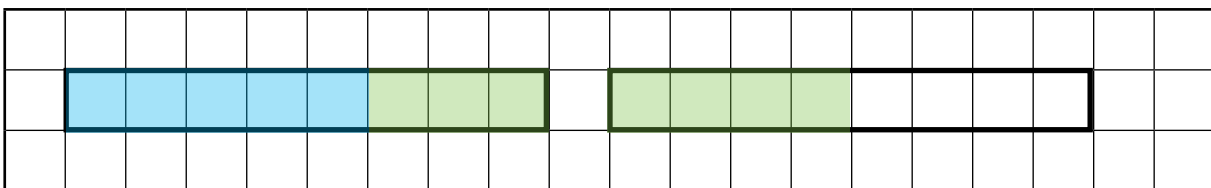
9) $\frac{4}{6} + \frac{5}{6} = \frac{9}{6}$ or $1\frac{3}{6}$



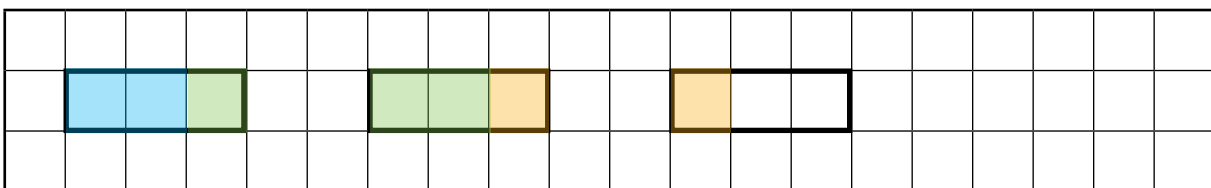
10) $\frac{5}{9} + \frac{7}{9} = \frac{12}{9}$ or $1\frac{3}{9}$



11) $\frac{5}{8} + \frac{7}{8} = \frac{12}{8}$ or $1\frac{4}{8}$



12) $\frac{2}{3} + \frac{3}{3} + \frac{2}{3} = \frac{7}{3}$ or $2\frac{1}{3}$



Adding Fractions

Draw fraction bars to show these calculations. Give the answer as improper fractions and as mixed numbers where possible.

1) $\frac{2}{7} + \frac{3}{7} =$

2) $\frac{2}{10} + \frac{4}{10} + \frac{3}{10} =$

3) $\frac{5}{6} + \frac{3}{6} =$ or

4) $\frac{6}{8} + \frac{3}{8} =$ or

5) $\frac{2}{6} + \frac{3}{6} =$

6) $\frac{3}{5} + \frac{4}{5} =$ or

7) $\frac{6}{8} + \frac{3}{4} =$ or

8) $\frac{5}{10} + \frac{3}{10} =$

9) $\frac{4}{6} + \frac{5}{6} =$ or

10) $\frac{5}{9} + \frac{7}{9} =$ or

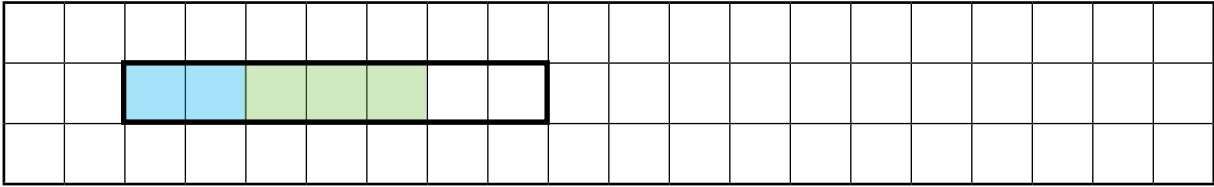
11) $\frac{5}{8} + \frac{7}{8} =$ or

12) $\frac{2}{3} + \frac{3}{3} + \frac{2}{3} =$ or

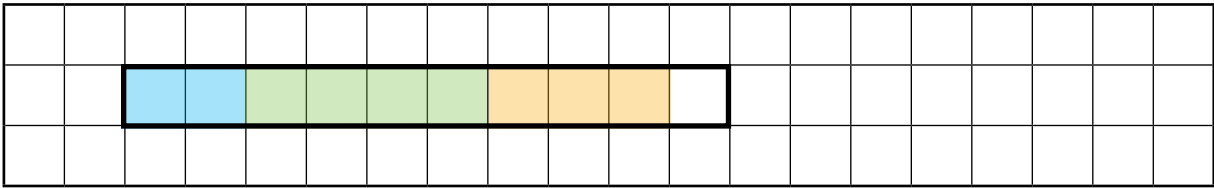
Adding Fractions: Answers

Draw fraction bars to show these calculations. Give the answer as improper fractions and as mixed numbers where possible.

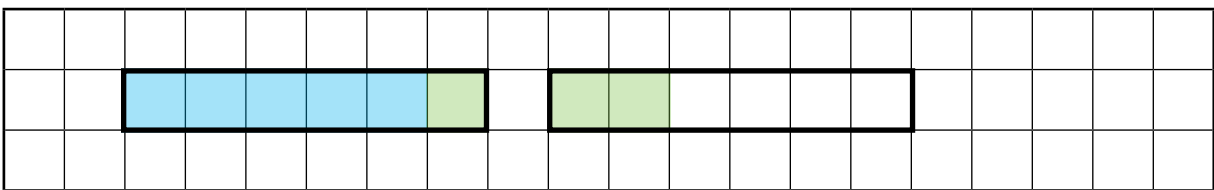
1) $\frac{2}{7} + \frac{3}{7} = \frac{5}{7}$



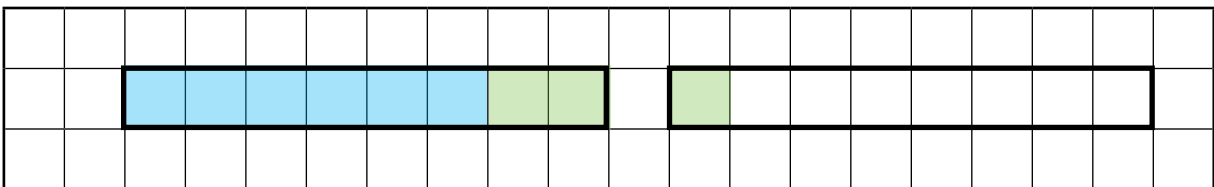
2) $\frac{2}{10} + \frac{4}{10} + \frac{3}{10} = \frac{9}{10}$



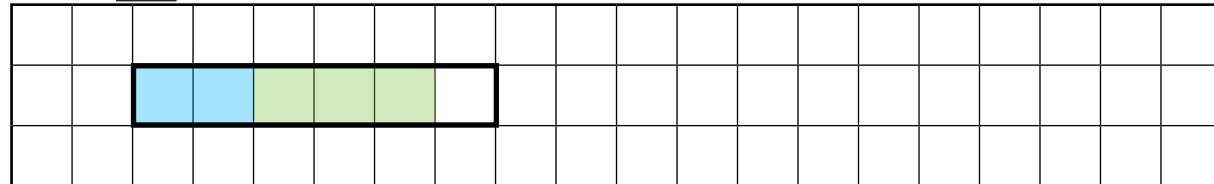
3) $\frac{5}{6} + \frac{3}{6} = \frac{8}{6}$ or $1\frac{2}{6}$



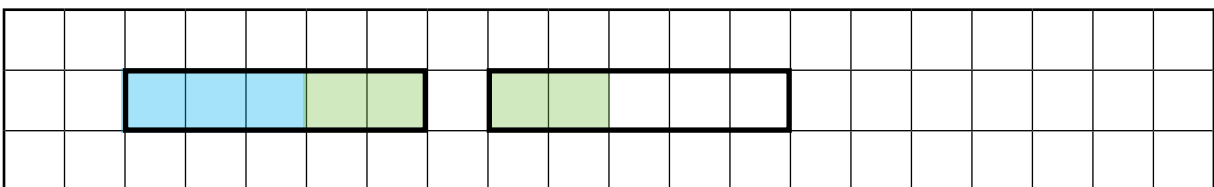
4) $\frac{6}{8} + \frac{3}{8} = \frac{9}{8}$ or $1\frac{1}{8}$




5) $\frac{2}{6} + \frac{3}{6} = \frac{5}{6}$



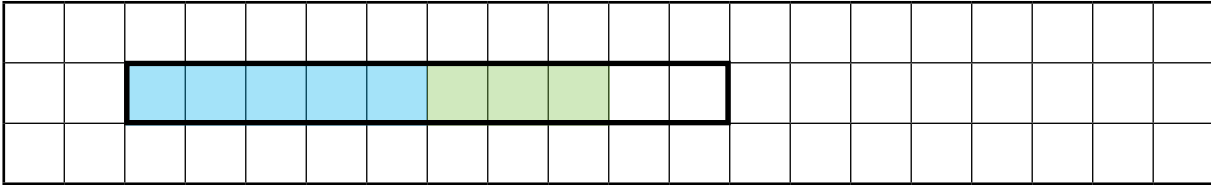
6) $\frac{3}{5} + \frac{4}{5} = \frac{7}{5}$ or $1\frac{2}{5}$



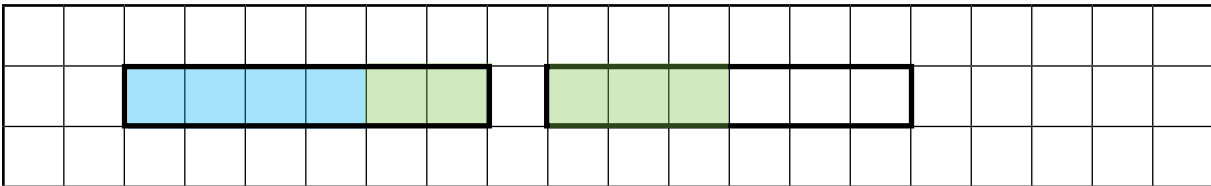
7) $\frac{2}{4} + \frac{3}{4} = \boxed{\frac{5}{4}}$ or $\boxed{1\frac{1}{4}}$



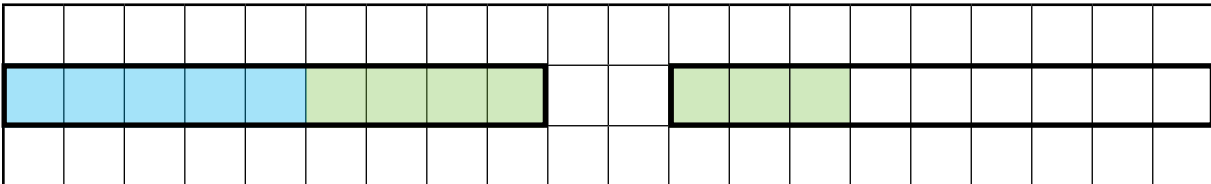
8) $\frac{5}{10} + \frac{3}{10} = \boxed{\frac{8}{10}}$



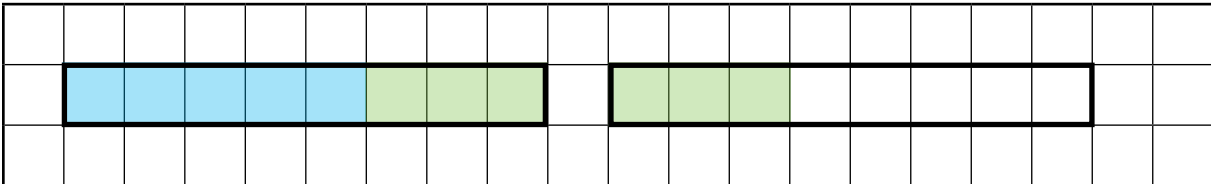
9) $\frac{4}{6} + \frac{5}{6} = \boxed{\frac{9}{6}}$ or $\boxed{1\frac{3}{6}}$



10) $\frac{5}{9} + \frac{7}{9} = \boxed{\frac{12}{9}}$ or $\boxed{1\frac{3}{9}}$



11) $\frac{5}{8} + \frac{7}{8} = \boxed{\frac{12}{8}}$ or $\boxed{1\frac{4}{8}}$



12) $\frac{2}{3} + \frac{3}{3} + \frac{2}{3} = \boxed{\frac{7}{3}}$ or $\boxed{2\frac{1}{3}}$

