

Pirate Maths Addition within 10

I can add numbers within 10.



Pirate Paul has been busy searching for more treasure to add to his chest. Calculate how much treasure is in each chest.

$$3 + \begin{array}{c} \text{3 green gemstones} \end{array} = \square$$

$$6 + \begin{array}{c} \text{1 crown} \end{array} = \square$$

$$5 + \begin{array}{c} \text{3 gold coins} \end{array} = \square$$

$$6 + \begin{array}{c} \text{4 orange gemstones} \end{array} = \square$$

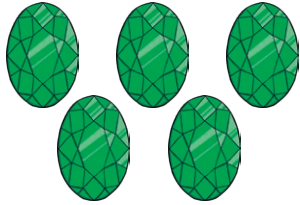
$$8 + \begin{array}{c} \text{2 necklaces} \end{array} = \square$$

Pirate Maths Subtraction within 10

I can subtract numbers within 10.



Sneaky Sally has her eye on Pirate Paul's treasure!
While Paul is asleep, she steals some! Calculate how much treasure Paul has left.



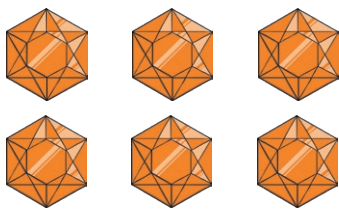
$$- 1 =$$




$$- 2 =$$



$$- 3 =$$



$$- 4 =$$



$$- 3 =$$

Pirate Maths Addition and Subtraction within 10 Answers

$3 + \begin{array}{c} \text{diamond} \quad \text{diamond} \\ \text{diamond} \end{array} = \boxed{6}$

$\begin{array}{c} \text{diamond} \quad \text{diamond} \quad \text{diamond} \\ \text{diamond} \quad \text{diamond} \end{array} - 1 = \boxed{4}$

$6 + \text{crown} = \boxed{7}$

$\begin{array}{c} \text{coin} \quad \text{coin} \\ \text{coin} \quad \text{coin} \end{array} - 2 = \boxed{2}$

$5 + \begin{array}{c} \text{coin} \quad \text{coin} \\ \text{coin} \end{array} = \boxed{8}$

$\begin{array}{c} \text{necklace} \quad \text{necklace} \quad \text{necklace} \\ \text{necklace} \quad \text{necklace} \quad \text{necklace} \end{array} - 3 = \boxed{3}$

$6 + \begin{array}{c} \text{diamond} \quad \text{diamond} \\ \text{diamond} \quad \text{diamond} \end{array} = \boxed{10}$

$\begin{array}{c} \text{diamond} \quad \text{diamond} \quad \text{diamond} \\ \text{diamond} \quad \text{diamond} \quad \text{diamond} \end{array} - 4 = \boxed{2}$

$8 + \begin{array}{c} \text{necklace} \\ \text{necklace} \end{array} = \boxed{10}$

$\begin{array}{c} \text{crown} \quad \text{crown} \quad \text{crown} \quad \text{crown} \\ \text{crown} \quad \text{crown} \quad \text{crown} \end{array} - 3 = \boxed{4}$

Pirate Maths Addition within 20

I can add numbers within 20.



Pirate Paul has been busy searching for more treasure to add to his chest. Calculate how much treasure is in each chest.

$$8 + \begin{array}{c} \text{Crown} \quad \text{Crown} \\ \text{Crown} \quad \text{Crown} \end{array} = \square$$

$$6 + \begin{array}{c} \text{Gem} \quad \text{Gem} \quad \text{Gem} \\ \text{Gem} \quad \text{Gem} \end{array} = \square$$

$$8 + \begin{array}{c} \text{Coin} \quad \text{Coin} \quad \text{Coin} \\ \text{Coin} \quad \text{Coin} \quad \text{Coin} \quad \text{Coin} \end{array} = \square$$

$$9 + \begin{array}{c} \text{Gem} \quad \text{Gem} \quad \text{Gem} \\ \text{Gem} \quad \text{Gem} \quad \text{Gem} \end{array} = \square$$


$$10 + \begin{array}{c} \text{Necklace} \quad \text{Necklace} \quad \text{Necklace} \quad \text{Necklace} \\ \text{Necklace} \quad \text{Necklace} \quad \text{Necklace} \quad \text{Necklace} \end{array} = \square$$

Pirate Maths Subtraction within 20

I can subtract numbers within 20.



Sneaky Sally has her eye on Pirate Paul's treasure!
While Paul is asleep, she steals some! Calculate how much treasure Paul has left.



$$- 5 =$$




$$- 6 =$$



$$- 7 =$$



$$- 6 =$$



$$- 9 =$$



$$- 6 =$$

Pirate Maths Addition and Subtraction within 20 Answers

$$8 + \begin{array}{c} \text{Crown} \quad \text{Crown} \\ \text{Crown} \quad \text{Crown} \end{array} = \boxed{12}$$

$$6 + \begin{array}{c} \text{Diamond} \quad \text{Diamond} \quad \text{Diamond} \\ \text{Diamond} \quad \text{Diamond} \end{array} = \boxed{11}$$

$$8 + \begin{array}{c} \text{Coin} \quad \text{Coin} \quad \text{Coin} \\ \text{Coin} \quad \text{Coin} \quad \text{Coin} \quad \text{Coin} \end{array} = \boxed{15}$$

$$9 + \begin{array}{c} \text{Gem} \quad \text{Gem} \quad \text{Gem} \\ \text{Gem} \quad \text{Gem} \quad \text{Gem} \end{array} = \boxed{15}$$

$$10 + \begin{array}{c} \text{Necklace} \quad \text{Necklace} \quad \text{Necklace} \quad \text{Necklace} \\ \text{Necklace} \quad \text{Necklace} \quad \text{Necklace} \quad \text{Necklace} \end{array} = \boxed{19}$$

$$\begin{array}{c} \text{Diamond} \quad \text{Diamond} \quad \text{Diamond} \quad \text{Diamond} \quad \text{Diamond} \quad \text{Diamond} \\ \text{Diamond} \quad \text{Diamond} \quad \text{Diamond} \quad \text{Diamond} \quad \text{Diamond} \quad \text{Diamond} \quad \text{Diamond} \end{array} - 5 = \boxed{10}$$

$$\begin{array}{c} \text{Coin} \quad \text{Coin} \quad \text{Coin} \quad \text{Coin} \quad \text{Coin} \quad \text{Coin} \quad \text{Coin} \\ \text{Coin} \quad \text{Coin} \quad \text{Coin} \quad \text{Coin} \quad \text{Coin} \quad \text{Coin} \quad \text{Coin} \end{array} - 6 = \boxed{8}$$

$$\begin{array}{c} \text{Necklace} \quad \text{Necklace} \quad \text{Necklace} \quad \text{Necklace} \quad \text{Necklace} \quad \text{Necklace} \quad \text{Necklace} \quad \text{Necklace} \\ \text{Necklace} \quad \text{Necklace} \quad \text{Necklace} \quad \text{Necklace} \end{array} - 7 = \boxed{8}$$

$$\begin{array}{c} \text{Gem} \quad \text{Gem} \quad \text{Gem} \quad \text{Gem} \quad \text{Gem} \quad \text{Gem} \quad \text{Gem} \quad \text{Gem} \quad \text{Gem} \quad \text{Gem} \\ \text{Gem} \quad \text{Gem} \quad \text{Gem} \quad \text{Gem} \quad \text{Gem} \quad \text{Gem} \quad \text{Gem} \quad \text{Gem} \quad \text{Gem} \end{array} - 6 = \boxed{14}$$

$$\begin{array}{c} \text{Crown} \quad \text{Crown} \quad \text{Crown} \quad \text{Crown} \quad \text{Crown} \quad \text{Crown} \quad \text{Crown} \quad \text{Crown} \quad \text{Crown} \quad \text{Crown} \\ \text{Crown} \quad \text{Crown} \quad \text{Crown} \end{array} - 9 = \boxed{4}$$

$$\begin{array}{c} \text{Treasure Chest} \quad \text{Treasure Chest} \quad \text{Treasure Chest} \quad \text{Treasure Chest} \quad \text{Treasure Chest} \quad \text{Treasure Chest} \quad \text{Treasure Chest} \quad \text{Treasure Chest} \quad \text{Treasure Chest} \\ \text{Treasure Chest} \quad \text{Treasure Chest} \quad \text{Treasure Chest} \quad \text{Treasure Chest} \quad \text{Treasure Chest} \end{array} - 6 = \boxed{12}$$

Pirate Maths Code Breaker

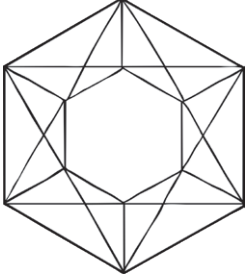
I can add and subtract numbers within 30.

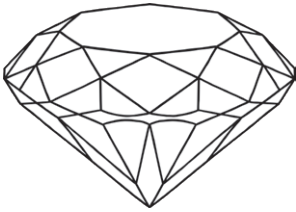



Pirate Paul has found all kinds of wonderful treasures.
Use the code breaker to colour the objects in the correct colour.

a	b	c	d	e	f	g	h	i	j	k	l	m
1	2	3	4	5	6	7	8	9	10	11	12	13

n	o	p	q	r	s	t	u	v	w	x	y	z
14	15	16	17	18	19	20	21	22	23	24	25	26

		Answer	Letter
	$28 - 26$		
	$7 + 5$		
	$30 - 9$		
	$17 - 12$		

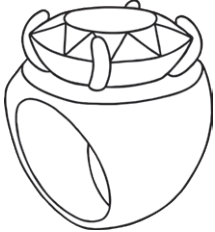
		Answer	Letter
	$20 - 2$		
	$7 - 2$		
	$30 - 26$		


		Answer	Letter
	$14 - 7$		
	$22 - 4$		
	$23 - 18$		
	$14 - 9$		
	$6 + 8$		


Pirate Maths Code Breaker

a	b	c	d	e	f	g	h	i	j	k	l	m
1	2	3	4	5	6	7	8	9	10	11	12	13

n	o	p	q	r	s	t	u	v	w	x	y	z
14	15	16	17	18	19	20	21	22	23	24	25	26

		Answer	Letter
	$21 - 14$		
	$3 + 12$		
	$4 + 8$		
	$19 - 15$		

		Answer	Letter
	$8 + 11$		
	$30 - 21$		
	$4 + 8$		
	$15 + 7$		
	$22 - 17$		
$4 + 14$			

		Answer	Letter
	$19 - 16$		
	$2 + 13$		
	$4 + 4 + 4$		
	$6 + 2 + 7$		
	$28 - 7$		
	$24 - 6$		
	$2 + 3 + 1$		
	$15 + 4 + 2$		
$7 + 3 + 2$			

Pirate Maths Code Breaker Answers

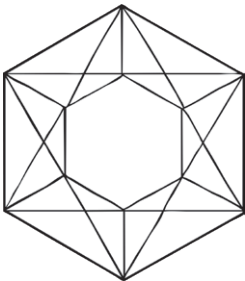
I can add and subtract numbers within 30.





Pirate Paul has found all kinds of wonderful treasures.
Use the code breaker to colour the objects in the correct colour.

a	b	c	d	e	f	g	h	i	j	k	l	m
1	2	3	4	5	6	7	8	9	10	11	12	13

n	o	p	q	r	s	t	u	v	w	x	y	z
14	15	16	17	18	19	20	21	22	23	24	25	26

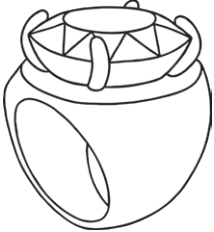
		Answer	Letter
	$28 - 26$	2	b
	$7 + 5$	12	l
	$30 - 9$	21	u
	$17 - 12$	5	e


		Answer	Letter
	$20 - 2$	18	r
	$7 - 2$	5	e
	$30 - 26$	4	d


		Answer	Letter
	$14 - 7$	7	g
	$22 - 4$	18	r
	$23 - 18$	5	e
	$14 - 9$	5	e
	$6 + 8$	14	n

a	b	c	d	e	f	g	h	i	j	k	l	m
1	2	3	4	5	6	7	8	9	10	11	12	13

n	o	p	q	r	s	t	u	v	w	x	y	z
14	15	16	17	18	19	20	21	22	23	24	25	26

		Answer	Letter
	$21 - 14$	7	g
	$3 + 12$	15	o
	$4 + 8$	12	l
	$19 - 15$	4	d

		Answer	Letter
	$8 + 11$	19	s
	$30 - 21$	9	i
	$4 + 8$	12	l
	$15 + 7$	22	v
	$22 - 17$	5	e
	$4 + 14$	18	r

		Answer	Letter
	$19 - 16$	3	c
	$2 + 13$	15	o
	$4 + 4 + 4$	12	l
	$6 + 2 + 7$	15	o
	$28 - 7$	21	u
	$24 - 6$	18	r
	$2 + 3 + 1$	6	f
	$15 + 4 + 2$	21	u
	$7 + 3 + 2$	12	l