



# Building Brick Subtraction

Can you subtract the bumps on the building bricks?




$$- 4 =$$




$$- 2 =$$




$$- 4 =$$



$$- 4 =$$



$$- 2 =$$




$$- 6 =$$




$$- 2 =$$

# Building Brick Subtraction


Can you subtract the bumps on the building bricks?




$$- \quad 4 \quad =$$




$$- \quad 6 \quad =$$




$$- \quad 3 \quad =$$




$$- \quad 8 \quad =$$



$$- \quad 7 \quad =$$




$$- \quad 5 \quad =$$




$$- \quad 1 \quad =$$

# Building Brick Subtraction


Can you subtract the bumps on the building bricks?




$$- \quad 12 \quad =$$




$$- \quad 9 \quad =$$




$$- \quad 17 \quad =$$




$$- \quad 7 \quad =$$



$$- \quad 4 \quad =$$



$$- \quad 13 \quad =$$



$$- \quad 6 \quad =$$