

**Year 3 Maths Homework - Spring Week 2**

**Due Monday 15th January**

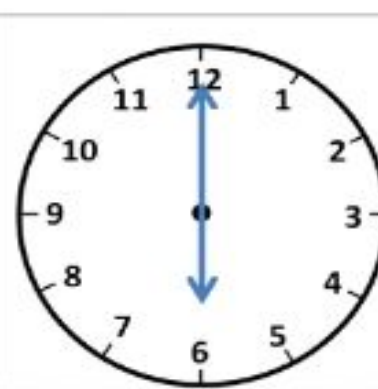
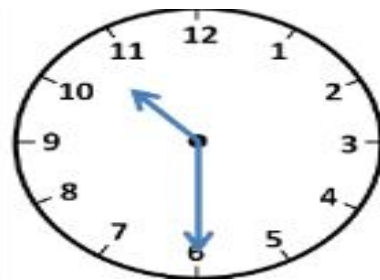
In year 3 time is an area that needs to be revisited all of the time. We would like the children to have a go at this activity to begin practicing recognising time in words and numbers.

Read the time on the clocks below and then write the time in words underneath, Can you also write the time in digital form

**Example:**



Half past 4  
4:30



**Year 3 Maths Homework - Spring Week 2**

**Due Monday 15th January**



In year 3, time is an area that needs to be revisited all of the time! We would like the children to have a go at this activity to begin practicing recognising time in words and numbers.

Read the time on the clocks below and then write the time in words underneath, Can you also write the time in digital form?

**Example:**



Half past 4  
4:30



**Challenge:**

The train leaves the station at 9.00am. It takes 90 minutes to reach Manchester. What time does the train arrive?