




Can you find out all the pairs of numbers that make 5? Use the 5 grids below to help you. Write out each number sentence too.




$$0 + 5 = 5$$



$$1 + 4 = 5$$



$$\underline{\quad} + \underline{\quad} = 5$$



$$\underline{\quad} + \underline{\quad} = 5$$

--	--	--	--	--

$$\underline{\quad} + \underline{\quad} = 5$$

--	--	--	--	--

$$\underline{\quad} + \underline{\quad} = 5$$

Can you read through them all and keep saying them out loud, like we do at school? Keep practising them!

If you've managed this, why don't you have a go at finding all the pairs of numbers that make 10.