

Year 1—Homework

L.O. I can find one less.

Can you find one less of these amounts?



One less




---



One less




---



One less



---



One less



---



One less



---



One less



---

11


One less



13



7



20



Can you fill in the missing numbers on the number track?

19	18		16	
----	----	--	----	--

23		21		19
----	--	----	--	----

30		28		26
----	--	----	--	----