

Year 2 homework

L.O. I can find the total of amounts

Bobby wants to buy some new toys



A) How much does it cost to buy the teddy and the yoyo?

B) How much does it cost to buy the toy train and the football?

C) How much does it cost to buy one of everything?

D) Gracie has £9

Circle three items she could buy

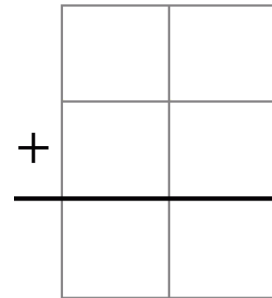

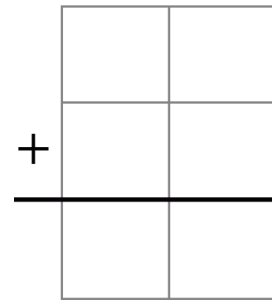

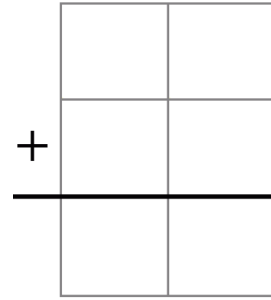

Harry goes to the shop to buy some sweets



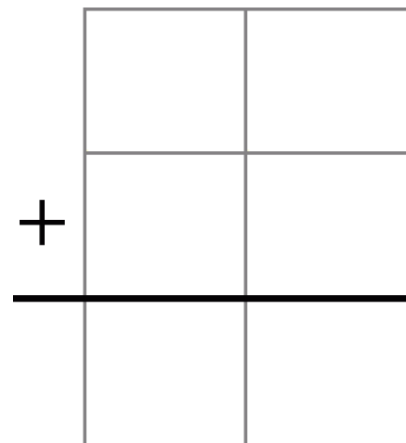
<hr/>	

How much money does he spend altogether?

Complete the bar models



Charlie has this money in his hand



He has 29p in his pocket. How much does he have altogether?

Max, Wren, Lily and Theany go shopping



A) Max buys a comic book and a chocolate bar. How much does he spend?

B) Wren buys a bottle of water, a lollipop and an apple. How much does she spend?

C) Lily buys 2 lollipops and a box of crayons. How much does Alex spend?

£		and		p
---	--	-----	--	---

D) Theany spends £3 and 80p. What items could Theany have bought?
