

Year 1—Homework

L.O.I can count in twos.

Circle the pairs of wasps.



How many are there altogether?

Circle the pairs of beetles.




How many are there altogether?

Circle the pairs of ladybirds.



How many are there altogether?

Circle the pairs of bees.



How many are there altogether?


There are 10 flowers.



true

false


There are 20 flowers



true

false

There are 24 flowers.



true

false

There are 42 flowers



true

false

Circle the mistake.

1	2	3	4	5	6	7	8	9	10
11	12	13	14	15	16	17	18	19	20

Circle the mistake.

11	12	13	14	15	16	17	18	19	20
21	22	23	24	25	26	27	28	29	30

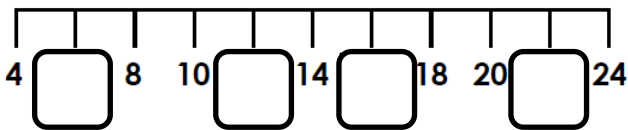
Circle the mistake

11	12	13	14	15	16	17	18	19	20
21	22	23	24	25	26	27	28	29	30
31	32	33	34	35	36	37	38	39	40

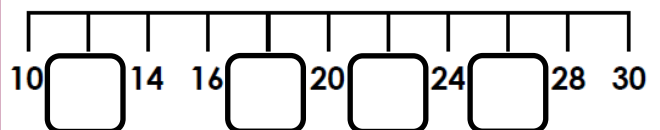
Circle the mistake

21	22	23	24	25	26	27	28	29	30
31	32	33	34	35	36	37	38	39	40
41	42	43	44	45	46	47	48	49	50

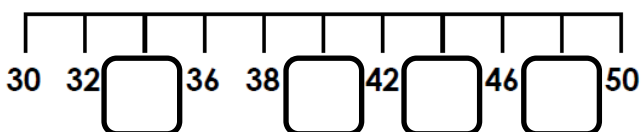
Fill in the missing numbers by counting forwards in 2's



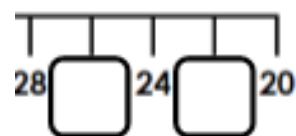
Fill in the missing numbers by counting forwards in 2's



Fill in the missing numbers by counting forwards in 2's



Fill in the missing numbers by counting backwards in 2's



Sally is counting in 2's.
Will she land on thirty?

21	22	23	24	25	26	27	28	29	30
31	32	33	34	35	36	37	38	39	40
41	42	43	44	45	46	47	48	49	50

yes

no

Complete the number sequence
by counting backwards in twos.

5 tens	48	forty -six				
-----------	----	---------------	--	--	--	--

Sam is counting in 2's. Will
he land on thirty-three?

21	22	23	24	25	26	27	28	29	30
31	32	33	34	35	36	37	38	39	40
41	42	43	44	45	46	47	48	49	50

yes

no

Complete the number sequence
by counting backwards in twos.

3 tens	32	thirty -four				
-----------	----	-----------------	--	--	--	--

Sally is counting in 2's.
Will she land on thirty?

21	22	23	24	25	26	27	28	29	30
31	32	33	34	35	36	37	38	39	40
41	42	43	44	45	46	47	48	49	50

yes

no

Complete the number sequence
by counting backwards in twos.

5 tens	48	forty -six				
-----------	----	---------------	--	--	--	--

Sam is counting in 2's.
Will he land on thirty-three?

21	22	23	24	25	26	27	28	29	30
31	32	33	34	35	36	37	38	39	40
41	42	43	44	45	46	47	48	49	50

yes

no

Complete the number sequence
by counting backwards in twos.

3 tens	32	thirty -four				
-----------	----	-----------------	--	--	--	--