

Year 2 homework

L.O. I can count and make amounts with notes and coins

How much is in each purse:



£          and          p



£          and          p

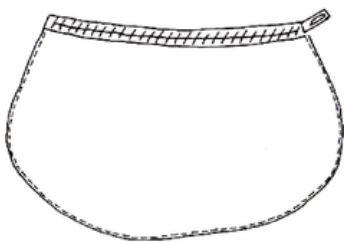


£          and          p

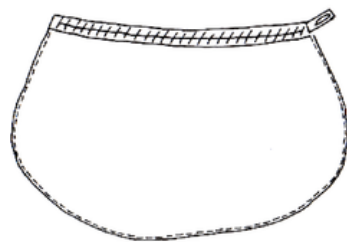


£          and          p

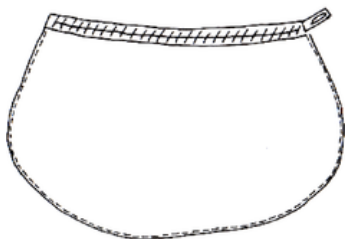
Draw the correct amount in each purse.



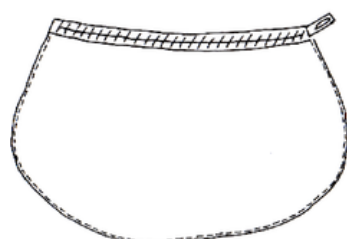
£ 1 and 23 p



£ 3 and 15 p



£ 4 and 32 p



£ 2 and 74 p

Which is the odd one out? Prove it.

A  +  +  =

B  +  +  =

C  +  =

Which is the odd one out? Prove it.

A  +  +  =

B  +  +  =

C  +  +  =

Which is the odd one out? Prove it.

A £5 + £1 + 10p + 10p =

B £2 + £2 + £2 + 20p =

C £5 + £2 + 10p + 10p =

Which is the odd one out? Prove it.

A £1 + £1 + £2 + 10p =

B £2 + 50p + 50p + 10p =

C £1 + £2 + 5p + 5p =