

Year 1—Homework

L.O. I can compare and measure weight

The orange weighs
cubes.



The cherries weigh
cubes.



The green apple weighs
cubes.



The red apple weighs
cubes.



Circle the correct word.

The apple is heavier / lighter than the cherries.

The orange is heavier / lighter than the apple.

The orange is heavier / lighter than the cherries.

The cherries is heavier / lighter than the apple.

Order the objects from heaviest to lightest.



= 3 cubes



= 5 cubes



= 2 cubes

--	--	--



= 5 cubes






= 8 cubes



= 4 cubes

--	--	--

Draw a line to match the statement to the correct picture.





I weigh more than the bear but less than the van.

I am the lightest object.

I am the heaviest object.

Tick the correct statements.

Look at the balance scales below.



Which statements are true?

- The toy car is heavier than the van.
- The van is heavier than the car.
- The car is lighter than the van.
- The van is lighter than the car.
- The car and van weigh the same amount.